


Q1: Order the numbers from the greatest to the smallest [2]

65 , 15 , 97 , 34 , 2 , 26

..... , , , , ,

Q2:Write the multiplication and division fact family for this array [2]



.....X.....=.....

.....÷.....=.....

Q3: Here's a Calendar

[1]

January


Mon	Tue	Wed	Thu	Fri	Sat	Sun
		1	2	3	4	5
6	7	8	9	10	11	12
13	14	15	16	17	18	19
20	21	22	23	24	25	26
27	28	29	30	31		

10

What's 2 days after Tuesday 14th of January

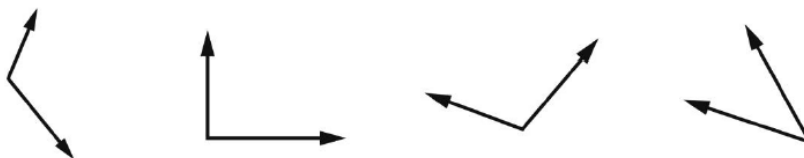
Q4: Draw the hands to match the time

[1]



Q5:Draw a ring around the acute angle

[1]



Q6: fill in the blanks

[3]

- 1 ten more than 9 tens is
- 6 + 4 + 1 =.....
- A Day = Hours