

Circle the correct number of objects.

Circle 9 drops.



Circle 12 stars.



Circle 15 pencils.



Circle 18 hearts.



Circle 11 notes.



Circle 19 balls.



Draw X's for the numbers shown



X				













Write the expanded form

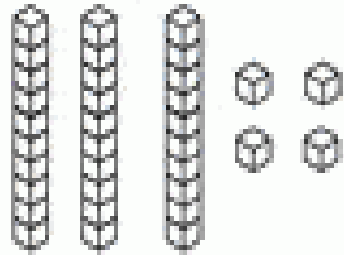
a)  $87 =$  \_\_\_\_\_

b)  $56 =$  \_\_\_\_\_



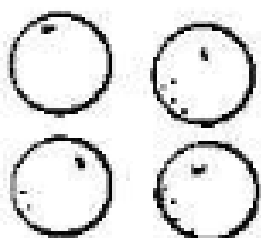


c)  $12 =$  \_\_\_\_\_

d)  $98 =$  \_\_\_\_\_

Draw rods (tens) and blocks (ones) to represent the numbers shown.

$34 =$ 	$10 =$
$21 =$	$49 =$
$44 =$	$27 =$
$8 =$	$25 =$
$65 =$	$53 =$

# Match



2

3

4

5





6

7

8

9

10



## **Write the following numbers in words**

a) **13**\_\_\_\_\_

b) **16**\_\_\_\_\_

c) **74**\_\_\_\_\_

d) **88**\_\_\_\_\_

e) **52**\_\_\_\_\_

f) **19**\_\_\_\_\_

g) **20**\_\_\_\_\_

h) **33**\_\_\_\_\_

## **Complete the following**

a) 7 and 20 makes 27

b) 30 and 4 makes \_\_\_\_\_

c) 40 and 3 makes \_\_\_\_\_

d) 10 and 2 makes \_\_\_\_\_

### Count forward

<b>34</b>	<b>35</b>				
-----------	-----------	--	--	--	--

### Count backward

<b>76</b>	<b>75</b>				
-----------	-----------	--	--	--	--

### Count forward

<b>28</b>	<b>29</b>				
-----------	-----------	--	--	--	--

### Count backward

<b>82</b>	<b>81</b>				
-----------	-----------	--	--	--	--

### Count backward

<b>98</b>	<b>97</b>				
-----------	-----------	--	--	--	--